


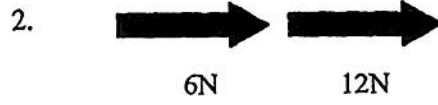
Name: \_\_\_\_\_ Period: \_\_\_\_\_ Date: 11/4/19

### Balanced / Unbalanced Forces Practice Sheet


Find the Net Force for each problem given below.



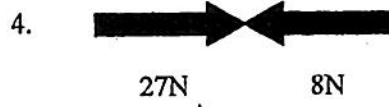
15N → unbalanced




18N → unbalanced



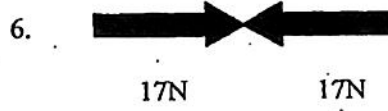
4N ← unbalanced



19N → unbalanced



9N → unbalanced




0N No motion  
Balanced



0N  
No changed in motion  
Balanced




29N ↑  
unbalanced




17N ↓  
unbalanced



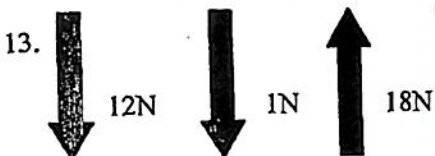
46N ← unbalanced



0N No changed in motion  
Balanced



32N → unbalanced



5N ↑ unbalanced



12N →  
unbalanced