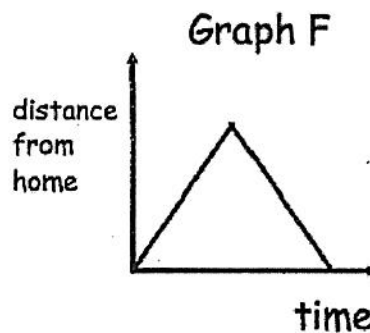
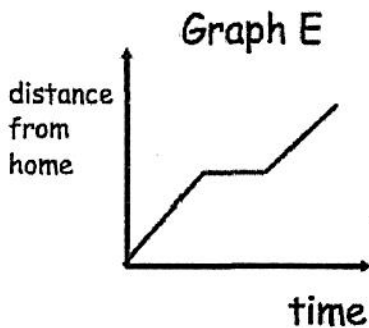
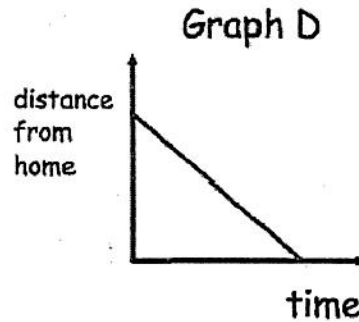
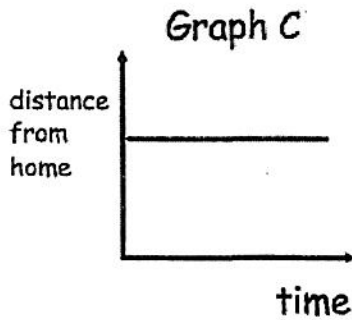
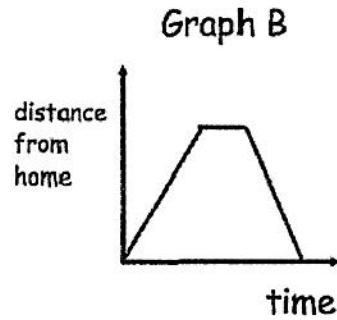
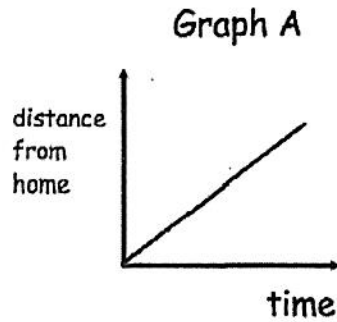


Name: \_\_\_\_\_ Date: 10/15/19 Period: \_\_\_\_\_

Directions: Shown below are six distance-time graphs. Each sentence in the table describes one of the graphs. Write the letter of the correct graph next to each sentence.



Mr. Jones travels to work and immediately returns	F
Mr. Jones leaves work and travels home at a steady speed	D
Mr. Jones leaves home and travels to work at a steady speed	A
Mr. Jones stays at work	C
Mr. Jones travels to work, stays there for some time and then returns home	B
Mr. Jones leaves home and travels to work, stopping at the shop on the way	E